


Kindergarten, Day 4 Math: Counting and Writing Numbers to 20

Directions: Count. Write each number to match.



Two groups of 10 cherries each, arranged in two rows of five. To the right is a large empty square box.



Two rows of 10 grapes each, arranged in two rows of five. To the right is a large empty square box.

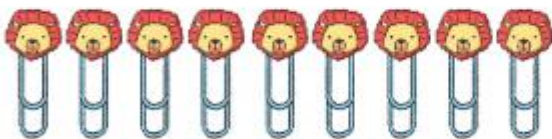
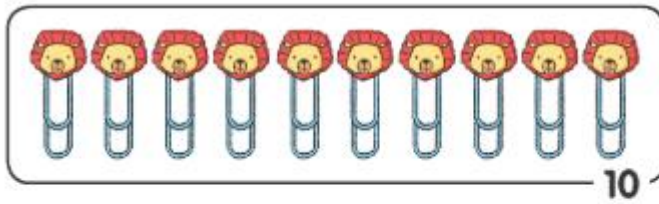

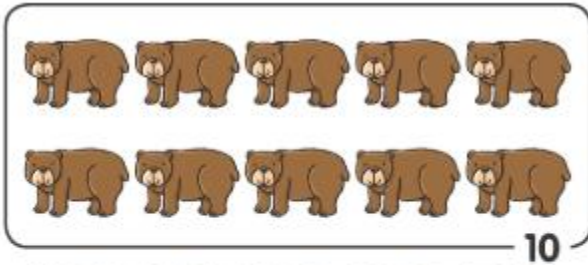




A group of 15 lemons arranged in four rows: 5 in the first row, 6 in the second, 4 in the third, and 5 in the fourth. To the right is a large empty square box.



Two groups of 10 oranges each, arranged in two rows of five. To the right is a large empty square box.

**Directions:** Count on from 10. Write each number.





Can you make your own?